



**Periodic Test III – 2022-2023**

**Name:** \_\_\_\_\_

**Grade:** I \_\_\_\_\_

**Subject:** Maths

**Date:** 11-11-22



**Time:** 45 mins

**Marks  
obtained:**

**Total:20**

**I. Look at the pair of objects below. Fill in the blanks with heavier or lighter. (3 X1=3)**

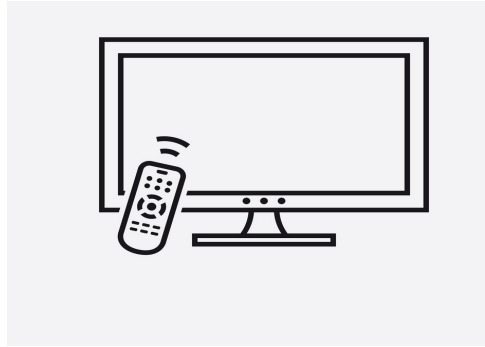
**1. The watermelon is \_\_\_\_\_ than the mango.**



**2. The bag is \_\_\_\_\_ than the feather.**



3. The apple is \_\_\_\_\_ than the television.



**II. Write true or false**

**(5 X1=5)**

4. 9 tens 2 ones is equal to 92. \_\_\_\_\_

5. One less than 46 is 45. \_\_\_\_\_

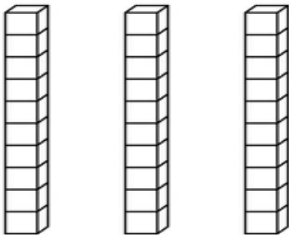
6. 38 comes one before 37 \_\_\_\_\_

7. one more than 88 is 89. \_\_\_\_\_

8. A weighing balance is used to compare the mass of two objects. \_\_\_\_\_

**III. Match the following**

**(5X1=5)**

9. ninety four	29
10. 6 tens + 4 ones	30
11. seventy eight	94
12. $20 + 9$	78
13. 	64

**IV. Answer the following.**

**(7 X1=7)**

**14.** Arrange the numbers from smallest to greatest.

20 , 48, 29, 18

---

**15.** Write 4 numbers that come after 86

---

**16.** Arrange the numbers from greatest to smallest.

54, 55, 50, 53

---

**17.** Form all possible two-digit numbers using digits 1, 5

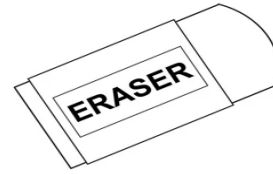

---

**18.** Write an expanded form of the given number.

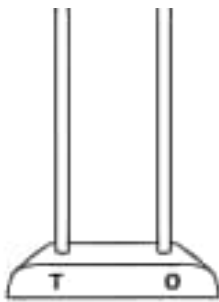
79

---

19.. Colour the object that appears to be heaviest.



20. Represent the number using spike abacus



39